















Subtraction and Addition in the Same Picture

<p>How many colored circles? How many white ones?</p>  <p><u>4</u> + <u>6</u> = 10</p>	 <p><u>3</u> + <u>4</u> = 7</p>
<p>Cover the colored circles. Write a subtraction sentence.</p>  <p>10 - <u>4</u> = <u>6</u></p>	<p>Cover the colored circles.</p>  <p>7 - <u>3</u> = <u>4</u></p>

1. Make an addition sentence and a subtraction sentence from the same picture.

<p>a. </p> <p>_____ + _____ = _____</p> <p>7 - _____ = _____</p>	<p>b. </p> <p>_____ + _____ = _____</p> <p>6 - _____ = _____</p>
<p>c. </p> <p>_____ + _____ = _____</p> <p>5 - _____ = _____</p>	<p>d. </p> <p>_____ + _____ = _____</p> <p>6 - _____ = _____</p>
<p>e. </p> <p>_____ + _____ = _____</p> <p>8 - _____ = _____</p>	<p>f. </p> <p>_____ + _____ = _____</p> <p>6 - _____ = _____</p>









2. Make an addition sentence and a subtraction sentence for the same picture.

<p>a.</p>  <p>_____ + _____ = _____</p> <p>_____ - _____ = _____</p>	<p>b.</p>  <p>_____ + _____ = _____</p> <p>_____ - _____ = _____</p>
<p>c.</p>  <p>_____ + _____ = _____</p> <p>_____ - _____ = _____</p>	<p>d.</p>  <p>_____ + _____ = _____</p> <p>_____ - _____ = _____</p>

3. In each problem, draw circles and then color some circles to fit the addition sentence. Then cover the **COLORED** circles and make a subtraction sentence.

<p>a. $7 + 1 = \underline{\hspace{2cm}}$</p> <p>_____ - _____ = _____</p>	<p>b. $6 + 3 = \underline{\hspace{2cm}}$</p> <p>_____ - _____ = _____</p>
<p>c. $2 + 3 = \underline{\hspace{2cm}}$</p> <p>_____ - _____ = _____</p>	<p>d. $2 + 5 = \underline{\hspace{2cm}}$</p> <p>_____ - _____ = _____</p>
<p>e. $7 + 4 = \underline{\hspace{2cm}}$</p> <p>_____ - _____ = _____</p>	<p>f. $3 + 3 = \underline{\hspace{2cm}}$</p> <p>_____ - _____ = _____</p>

4. Cover the colored objects, and write a subtraction sentence to fit the picture.

<p>a. </p> <p>_____ - _____ = _____</p>	<p>b. </p> <p>_____ - _____ = _____</p>
<p>c. </p> <p>_____ - _____ = _____</p>	<p>d. </p> <p>_____ - _____ = _____</p>
<p>e. </p> <p>_____ - _____ = _____</p>	<p>f. </p> <p>_____ - _____ = _____</p>
<p>g. </p> <p>_____ - _____ = _____</p>	<p>h. </p> <p>_____ - _____ = _____</p>

5. In each problem, draw some circles and color some circles to fit the addition sentence. Then cover the **COLORED** circles and make a subtraction sentence.

<p>a. $9 + 1 = \underline{\quad}$</p> <p>_____ - _____ = _____</p>	<p>b. $7 + 2 = \underline{\quad}$</p> <p>_____ - _____ = _____</p>
<p>c. $10 + 4 = \underline{\quad}$</p> <p>_____ - _____ = _____</p>	<p>d. $10 + 2 = \underline{\quad}$</p> <p>_____ - _____ = _____</p>

6. Draw circles to fit the subtraction sentence. Write an addition sentence too.

<p>a. $9 - 4 = \underline{\quad}$</p> <p>$\underline{\quad} + \underline{\quad} = \underline{\quad}$</p>	<p>b. $10 - 5 = \underline{\quad}$</p> <p>$\underline{\quad} + \underline{\quad} = \underline{\quad}$</p>
<p>c. $8 - 5 = \underline{\quad}$</p> <p>$\underline{\quad} + \underline{\quad} = \underline{\quad}$</p>	<p>d. $8 - 4 = \underline{\quad}$</p> <p>$\underline{\quad} + \underline{\quad} = \underline{\quad}$</p>
<p>e. $7 - 4 = \underline{\quad}$</p> <p>$\underline{\quad} + \underline{\quad} = \underline{\quad}$</p>	<p>f. $9 - 8 = \underline{\quad}$</p> <p>$\underline{\quad} + \underline{\quad} = \underline{\quad}$</p>

Puzzle Corner

First subtract and add. But do not write the answers! Just think them in your mind. Then compare, and write $<$ or $>$ or $=$.

$3 \square 3 - 1$

$6 + 5 \square 6$

$10 \square 10 - 1$

$9 - 7 \square 8 - 7$

$6 - 4 \square 2 + 3$

$8 - 5 \square 5 + 3$

$5 + 2 \square 8 + 2$

$10 - 1 \square 10 - 3$

$7 - 4 \square 8 - 5$

$10 - 2 \square 8 - 2$

$10 + 0 \square 10 - 0$

$8 - 1 \square 8 + 1$